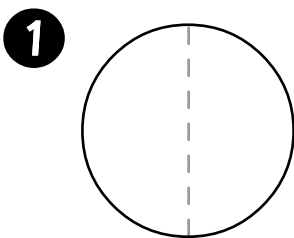




Name: _____ Class: _____

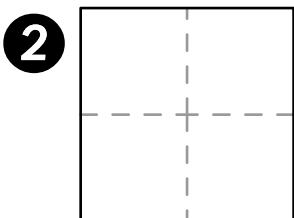
Use fractions to name the shaded areas.



Colour in one of the two parts of the circle.

How many parts did you color? _____

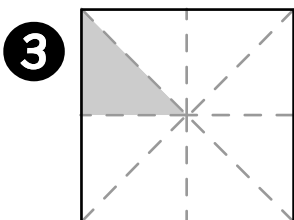
How many parts are there in total? _____



Colour in one of the four parts of the square.


How many parts did you color? _____

How many parts are there in total? _____



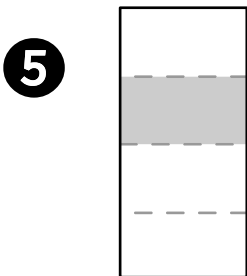
How many parts are shaded? _____

How many parts are there in total? _____



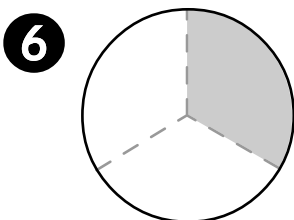
How many parts are shaded? _____

How many parts are there in total? _____



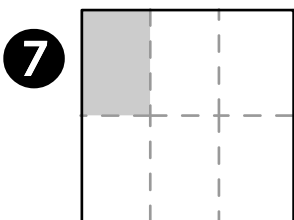
How many parts are shaded? _____

How many parts are there in total? _____



How many parts are shaded? _____

How many parts are there in total? _____



How many parts are shaded? _____

How many parts are there in total? _____

