





Name: _____ Class: _____

Manu is really good at fishing and he shares his fish with other people.
Solve these problems to find out how many fish he gives away.


1 Manu caught 50 fish. He gave $\frac{1}{5}$ to Stig.
How many fish was that?




2 Manu caught 30 fish. He gave $\frac{1}{2}$ to Sten.
How many fish was that?




3 Manu caught 27 fish. He gave $\frac{1}{3}$ to Klara.
How many fish was that?




4 Manu caught 24 fish. He gave $\frac{3}{4}$ to Jack.
How many fish was that?




5 Manu caught 32 fish. He gave $\frac{1}{4}$ to Granny.
How many fish was that?




6 Manu caught 20 fish. He gave $\frac{3}{4}$ to Stig.
How many fish was that?



7 Manu caught 35 fish. He gave $\frac{1}{7}$ to Stig.
How many fish was that?



8 Manu caught 60 fish. He gave $\frac{5}{10}$ to Klara.
How many fish was that?




Manu has had a really good days fishing. He has caught 72 fish!


9 What would $\frac{1}{3}$ of Manu's fish be?



10 What would $\frac{1}{2}$ of Manu's fish be?



11 What would $\frac{1}{4}$ of Manu's fish be?



12 What would $\frac{1}{6}$ of Manu's fish be?



13 What would $\frac{1}{12}$ of Manu's fish be?

